

**SOF INTERNATIONAL GENERAL
KNOWLEDGE OLYMPIAD
2022-23**

CLASS

3

QUESTION
PAPER SET

B

DO NOT OPEN THIS BOOKLET UNTIL ASKED TO DO SO

Total Questions: 35 | Time: 1 hr.

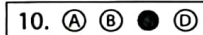
Guidelines for the Candidate

1. You will get additional ten minutes to fill up information about yourself on the OMR Sheet, before the start of the exam.
2. Write your **Name, School Code, Class, Roll No.** and **Mobile Number** clearly on the **OMR Sheet** and do not forget to sign it. We will share your marks / result and other information related to SOF exams on your mobile number.
3. The Question Paper comprises four sections:
General Awareness (20 Questions), **Current Affairs** (5 Questions), **Life Skills** (5 Questions) and **Achievers Section** (5 Questions).
Each question in Achievers Section carries 2 marks, whereas all other questions carry one mark each.
4. All questions are compulsory. There is no negative marking. Use of calculator is not permitted.
5. There is only ONE correct answer. Choose only ONE option for an answer.
6. To mark your choice of answers by darkening the circles on the OMR Sheet, use **HB Pencil** or **Blue / Black ball point pen** only. E.g.

Q.10: What would you keep in an aquarium?

- A. Cats B. Dogs C. Fish D. Cows

As the correct answer is option C, you must darken the circle corresponding to option C on the OMR Sheet.



7. Rough work should be done in the blank space provided in this booklet.
8. Return the OMR Sheet to the invigilator at the end of the exam.
9. Please fill in your personal details in the space provided on this page before attempting the paper.



Name:.....

SOF Olympiad Roll No.:..... Contact No.:.....

GENERAL AWARENESS

1. We consume milk in many ways. Which of these items is NOT made from milk?
- A. Curd
B. Cream
C. Butter
D. Cereal
-

2. To whom would you go to buy flowers for your mother on Mother's Day?
- A. Chemist
B. Mechanic
C. Stationer
D. Florist
-

3. Select the opposite of the given word.

Jovial

- A. Glad
B. Cheerful
C. Gloomy
D. Happy
-

4. Which of the following plants has hollow stem?

- A. Bamboo
B. Rose
C. Neem
D. Banyan
-

5. 'Litti Chokha' is a famous dish of _____ in India.






- A. Tamil Nadu
B. Kerala
C. Bihar
D. Himachal Pradesh
-

6. The National Flag of the United Kingdom is

- A. Union Jack
B. The Stars and Stripes
C. The Red, White and Blue
D. Old Glory.
-

7. Which of the following CANNOT be considered as an input device of computer?

- A.  B.  C.  D. Both A and B

Which of the following materials gets attracted towards a magnet?

- A. Glass jar
- B. Iron screw
- C. Paper sheet
- D. Plastic pen

9. Identify the Indian classical dance form shown in the given picture.



- A. Bharatanatyam
- B. Kathakali
- C. Kathak
- D. Manipuri

10. Which of the following materials will float on water?

- A. Sand
- B. Oil
- C. Iron nail
- D. Stone

11. Fill in the blank by selecting the correct option.

I was not _____ home when she came.

- A. On
- B. At
- C. In
- D. Over

12. Which of the following animals does NOT bite or chew its food?



13. What was the name of Lakshmana's mother in Ramayana?

- A. Kaushalya
- B. Mandodari
- C. Sumitra
- D. Kaikeyi

14. Which of the following will NOT help in reducing air pollution?

- A. Using public transport instead of personal petrol car
- B. Walking to grocery shop
- C. Cycling to work place
- D. Burning of coal in kitchen instead of LPG

15. Which track and field event is shown in the given picture?



- A. Javelin throw
B. Shot put
C. Discus throw
D. Pole vault

16. What is the full form of STD in telecommunications?

- A. Subscriber Trunk Dialling
B. State Tele Dialling
C. Standard Toll Dialling
D. Special Trunk Dialling

17. Which of the following pairs is a means of air transport?

- A. Submarine and ship
B. Ship and helicopter
C. Aeroplane and helicopter
D. Bullock cart and bus

18. The field on which the game of baseball is played is called _____.

- A. Pitch
B. Arena
C. Court
D. Diamond

19. Bay of Bengal is a part of _____.

- A. Pacific Ocean
B. Arabian Sea
C. Indian Ocean
D. Southern Ocean

20. How many possible combinations of 1 bird and 1 nest each can be formed from the given birds and nests?



- A. 10
B. 15
C. 12
D. 8

CURRENT AFFAIRS

21. World Water Day is celebrated every year on _____.

- A. 22nd March
B. 8th June
C. 8th March
D. 28th February

22. Who is the current Prime Minister of Nepal?

A.



Sher Bahadur Deuba

B.



Madhav Kumar Nepal

C.



Baburam Bhattarai

D. None of these

23. Which country won the 2022 ICC Women's Cricket World Cup?

A. New Zealand

B. England

C. India

D. Australia

24. _____ was the initiative launched by India to bring back Indians stranded in Ukraine.

A. Ayushman Bharat

B. Operation Ganga

C. Operation Ukraine

D. Vande Bharat

25. The 2024 Summer Olympics will be held in _____.

A. Paris

B. London

C. New York

D. Brisbane

LIFE SKILLS

26. Which of the following will NOT help you in scheduling your activities?

A. Maintaining a calendar

B. Preparing a time table

C. Playing video games

D. Making a to-do list

27. To be respectful, we should

A. Shout at people

B. Speak politely

C. Hit, kick and throw things at people

D. Use mean words.

28. If you do not understand the problem that your teacher is solving on the blackboard, you should

A. Start talking to your friends

B. Start shouting at the teacher

C. Put your head down on the desk and sleep

D. Try to focus more and then ask the teacher for help.

29. If due to some reason you cannot play outside after school, what should you do to keep yourself fit and active?
- A. Forget about the fitness
 - B. Watch some fitness videos on a smart phone
 - C. Dance to music, do some stretches or try yoga
 - D. Skip the lunch and dinner

30. Your grandma is unable to find her spectacles. What should you do?
- A. You should go out to play with your friends.
 - B. You should help your grandma in finding her spectacles.
 - C. You should tell your grandma to find it herself as you are busy in watching television.
 - D. You should shout at her for being careless about her spectacles.

ACHIEVERS SECTION

31. Which of the following CANNOT be found in the given word grid?

P	E	S	S	O	G
O	B	A	H	T	I
R	I	N	I	G	G
D	O	L	L	A	R
S	H	M	L	E	L
U	K	D	I	N	A
N	Y	E	N	R	U
D	A	P	G	P	E
E	T	E	U	R	O

- A. The currency of Kenya
 - B. The currency of Japan
 - C. The currency of Myanmar
 - D. The currency of Switzerland
-
32. Select the INCORRECT statement.
- A. Arun Jaitley Stadium (formerly known as Feroz Shah Kotla Stadium) is situated in Delhi.
 - B. Eden Gardens Stadium is situated in Kolkata.
 - C. Wankhede Stadium is situated in Bhubaneswar.
 - D. M. Chinnaswamy Stadium is situated in Bengaluru.

33. Match the columns and select the correct option.

Column I
(Road sign)

Column II
(Meaning)



(i) No stopping



(ii) Give way



(iii) No entry



(iv) No parking

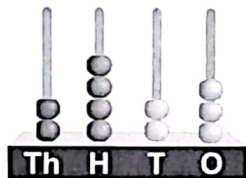
A. P-(iv), Q-(ii), R-(i), S-(iii)

B. P-(ii), Q-(iii), R-(iv), S-(i)

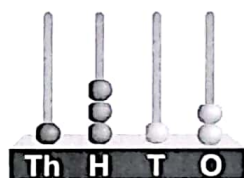
C. P-(iii), Q-(iv), R-(ii), S-(i)

D. P-(iv), Q-(iii), R-(i), S-(ii)



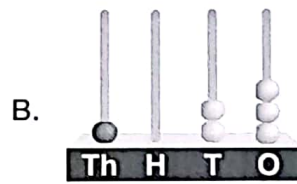
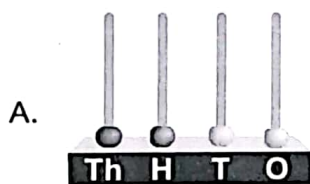
34. The value of



-



= _____.



35. Which of the following types of computers is being used by the girl shown in the given image?

- A. Desktop computer
- B. Smartphone
- C. Laptop computer
- D. None of these





For latest updates & information, please like  our Facebook page (www.facebook.com/sofworld) or register c

<http://www.sofworld.org/subscribe-updates.html>

For Level 1 and Level 2 preparation material / free sample papers, please log on to www.mtg.in



National Office: Plot 99, First Floor, Sector 44 Institutional area, Gurugram -122 003 (HR) India

Email: info@sofworld.org | Website: www.sofworld.org

Regd. Office: 406, Taj Apt., Ring Road, New Delhi-110 029

Note: Please address all communication to the National Office only.